

SUNSHINE MATH
Venus, III

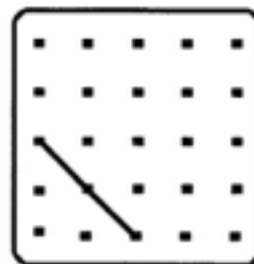
Name: _____

(This shows my own thinking.)

- ★ 1. I am a number. Subtract me from 12 and get 9.
Who am I?

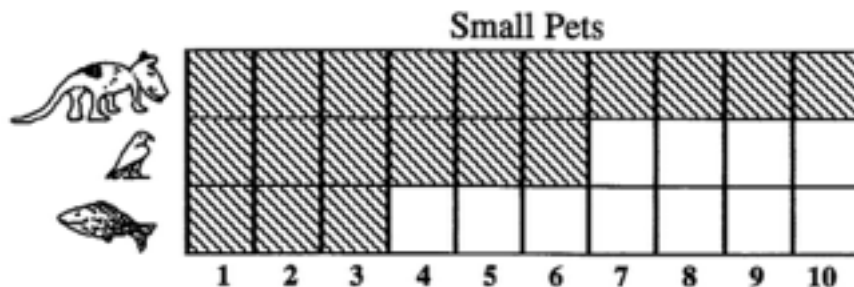
Answer: _____

- ★★★ 2. Draw a square in the box to the right. Begin with the part given.




- ★★ 3. These are the favorite pets in a first grade class. How many more children liked dogs rather than birds and fish together?

Answer: ____ more



- ★ 4. Four children each chose a shape. Jessica's shape is round. Jane's shape has 4 corners and 4 sides the same length. Scott's shape has 3 sides. Which shape did Mark choose? Circle it.



- ★★★ 5. Write the missing numbers in this part of the hundreds chart.

		4	
13		14	
23			

- ★★★★ 6. Use these digits: 1 9 3 6

What is the smallest 2-digit number you can make? _____

What is the greatest 2-digit number? _____

- ★★★ 7. Complete the table.

Number of pencils	1	2	3	4	5	6	7
Amount you pay	3¢						



How much would 10 pencils cost? _____